

Answers of Exercises

Module Frequency Response FIR filter

Note:

- The symbol [P] in the margin of an exercise denotes there is a pencast available.

Exercise 1

$$|H(e^{j\theta})| = 9 - 6 \cos(\theta) + 2 \cos(2\theta) \text{ and } \angle\{H(e^{j\theta})\} = -2\theta$$

Exercise 2

a.

$$H(e^{j\theta}) = -1 + 2e^{-j\theta} - e^{-j2\theta}$$

b.

$$y[n] = 10 \cos\left(\frac{\pi}{2}n - \frac{\pi}{6}\right)$$

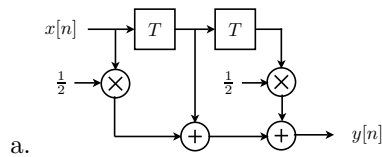
c.

$$y[n] = h[n] = -\delta[n] + 2\delta[n-1] - \delta[n-2]$$

d.

$$y[n] = u[n] \star h[n] = -\delta[n] + \delta[n-1]$$

Exercise 3

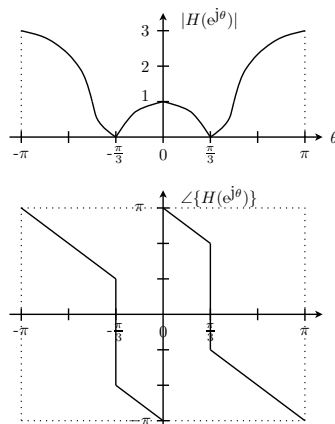


b.

$$y[n] = 12 \cos\left(\frac{\pi}{3}n - \frac{\pi}{2}\right)$$

Exercise 4

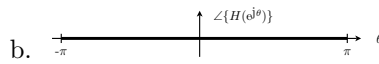
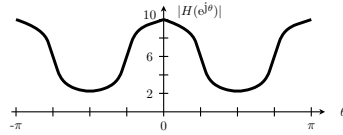
$$H(e^{j\theta}) = (1 - 2 \cos(\theta)) \cdot e^{-j\theta}$$



Exercise 5

a.

$$H(e^{j\theta}) = 6 + 4 \cos(2\theta)$$



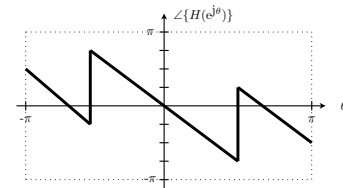
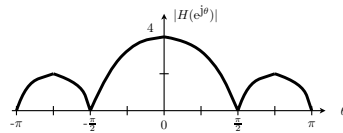
c.

$$y[n] = 100 - 20 \cos\left(\frac{\pi}{2}(n-1)\right)$$

Exercise 6

a.

$$H(e^{j\theta}) = \left(\frac{\sin(2\theta)}{\sin(\frac{1}{2}\theta)}\right) \cdot e^{-j(\frac{3}{2})\theta}$$



c. $\theta_0 = \frac{\pi}{2}$ since

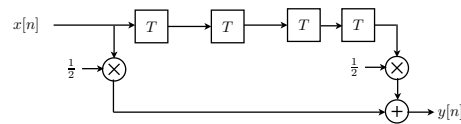
$$x[n] = 1 + 2 \cos\left(n\frac{\pi}{2}\right) \mapsto y[n] = 4$$

Exercise 7

a. Band-stop filter.

b.

$$H(e^{j\theta}) = \frac{1}{2} + \frac{1}{2}e^{-j4\theta} \quad \circ\circ \quad h[n] = \frac{1}{2}\delta[n] + \frac{1}{2}\delta[n-4]$$



Exercise 8

a.

$$y_3[n] = x_3[n-1] - x_3[n-2] \Rightarrow h_3[n] = \delta[n-1] - \delta[n-2]$$

b.

$$H_1(e^{j\theta}) = 1 + e^{-j2\theta} \quad H_2(e^{j\theta}) = 7e^{-j5\theta} + 7e^{-j6\theta}$$

c.

$$H(e^{j\theta}) = 7e^{-j6\theta} - 7e^{-j10\theta}$$

d.

$$h[n] = 7\delta[n-6] - 7\delta[n-10]$$

Exercise 9

[P2]

a.

$$H(e^{j\theta}) = 1 + e^{-j3\theta} \quad \circ\text{-}\circ \quad h[n] = \delta[n] + \delta[n-3]$$

b. The system filters out frequencies $\theta = \pm\pi$ and $\theta = \pm\frac{\pi}{3}$.

c.

$$y[n] = 6 + \delta[n-2] + \delta[n-5] + \sqrt{2} \cos\left(\frac{\pi}{2}n + \frac{\pi}{2}\right)$$

Exercise 10

a.

$$H_1(e^{j\theta}) = 1 - \alpha e^{-j\theta}$$

b.

$$H_2(e^{j\theta}) = \frac{1 - \alpha^6 e^{-j6\theta}}{1 - \alpha e^{-j\theta}}$$

c.

$$H(e^{j\theta}) = 1 - \alpha^6 e^{-j6\theta} \quad \circ\text{-}\circ \quad h[n] = \delta[n] - \alpha^6 \delta[n-6]$$

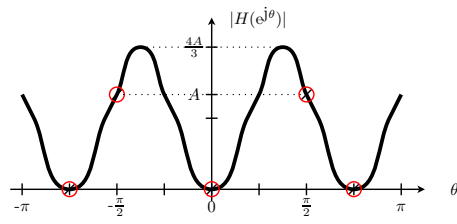
d.


$$h[n] = h_1[n] \star h_2[n] = \delta[n] - \alpha^6 \delta[n-6]$$

Exercise 11

$$y(t) = 20 + 6\sqrt{2} \cos\left(2000\pi t + \frac{\pi}{12}\right).$$

Exercise 12



a.  Design constraints

b. The filter must be the first filter $H_1(e^{j\theta})$ and we must choose $f_{s,a}$.